

NAME: _____

Math Words

count on I can start at 5 and count on to 10: "6, 7, 8, 9, 10."

more I watched TV 1 more hour after bedtime.

unit A unit has a length of 1 on a number line.

Starter Problem

How many are 7 and 4 more?
Count on to find out.
Write how many in the box.



NAME: _____

Starter Problem

How many are 7 and 4 more?
Count on to find out.
Write how many in the box.

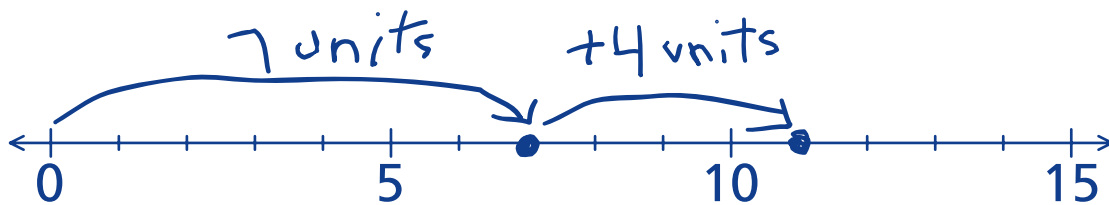


Student Thinking




Brian

I used my number line. I made a point for 7. Then I counted on 4 more and made a point. It's 11.



Hallie

I used my fingers to count on 4 more.



NAME: _____

Things to Remember



Handwriting practice lines for the first section, consisting of four sets of three lines (top solid, middle dashed, bottom solid). A solid purple rectangular box is located below the first set of lines.



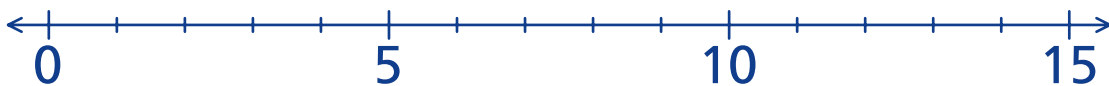
Handwriting practice lines for the second section, consisting of four sets of three lines (top solid, middle dashed, bottom solid).

NAME: _____

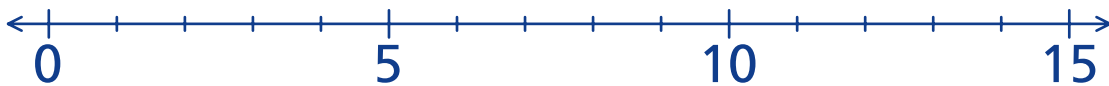
Our Turn

Count on. Use your fingers or the number line.

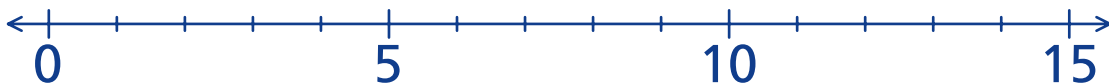
1. How many are 6 and 3 more?



2. How many are 8 and 4 more?



3. How many are 9 and 2 more?



NAME: _____

My Turn

Count on. Use your fingers or the number line.

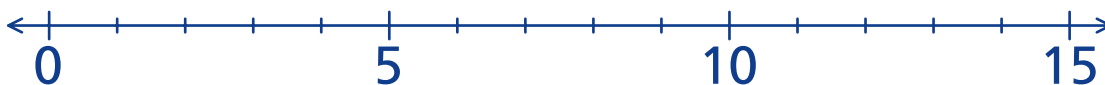
1. How many are 9 and 3 more?



2. How many are 6 and 2 more?



3. How many are 8 and 5 more?

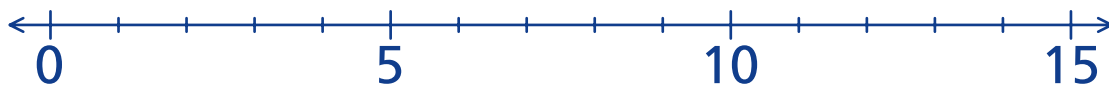


NAME: _____

Mini Lesson

Use the number line to find out how many.
Fill in the circle next to the answer you choose.

1. How many are 9 and 4 more?

☐ 12☐ 13☐ 14

2. How many are 6 and 4 more?

☐ 8☐ 9☐ 10